



Blanket Coverage


Activity Sheet

Name: _____ Class: _____

Label the length and width of each rectangle.

Count the number of square units, then find the area using multiplication.

1

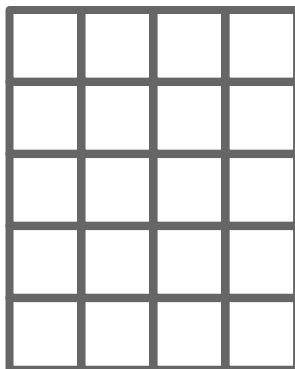


_____ units

_____ units

Count: _____
Area: _____ units²

2




_____ units

_____ units

Count: _____
Area: _____ units²

3




_____ units

_____ units

Count: _____
Area: _____ units²

4



_____ units

_____ units

Count: _____
Area: _____ units²

5




_____ units

_____ units

Count: _____ Area: _____ units²

6




_____ units

_____ units

Count: _____ Area: _____ units²

7



_____ units

_____ units

Count: _____ Area: _____ units²

